

Digital Time – O’Clock

What is the time?

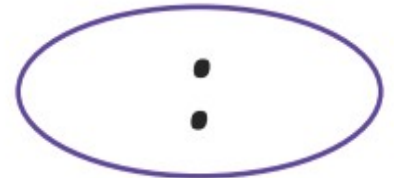
Write digits in the clocks to show the time. The first one has been done for you.



2 o'clock



5 o'clock




10 o'clock



8 o'clock



12 o'clock



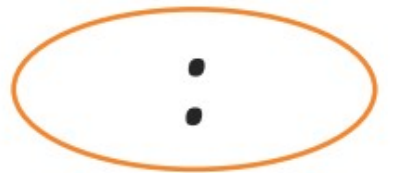
3 o'clock



9 o'clock



7 o'clock



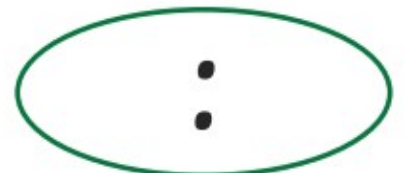
1 o'clock



4 o'clock



11 o'clock



6 o'clock