

Analogue Time – Half Past

What's the time?

Draw hands on the clocks to show the time. Remember to draw a short hand to show hours and a long hand to show minutes. Try to point the hands as accurately as you can.



half past 2



half past 5




half past 10




half past 8



half past 12




half past 3



half past 9




half past 7



half past 1



half past 4




half past 11



half past 6

Analogue Time – Half Past Answers



half past 2



half past 5




half past 10



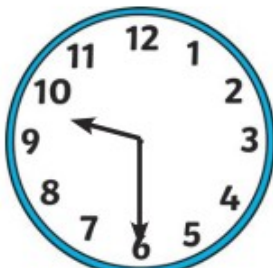
half past 8



half past 12




half past 3




half past 9



half past 7



half past 1



half past 4



half past 11



half past 6